

PB PAGEZ EXAMS
END OF 1ST TERM EXAMINATION
MATHEMATICS

NAMECLASS: 3 DATE.....


Answer all questions

WRITE THE NAME OF EACH QUADRILATERAL UNDER IT.

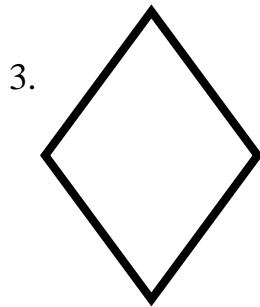
(rectangle, trapezium, square, parallelogram, rhombus)



.....




.....



.....



.....




.....

What is the length of the following in centimeters (cm)?

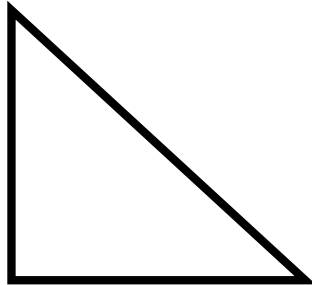
Item	Meter	Centimeter
6. Teachers desk	1m	
7. Classroom	4m	
8. Living room	2m	
9. Living room	6m	
10. Distance between two cars.	3m	

Write *regular* or *irregular* to describe the shapes below.

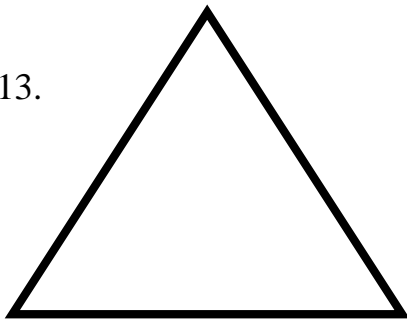
11.




12.



13.



14.



15.



.....

Draw the following line segments

16. 3cm

17. 7cm

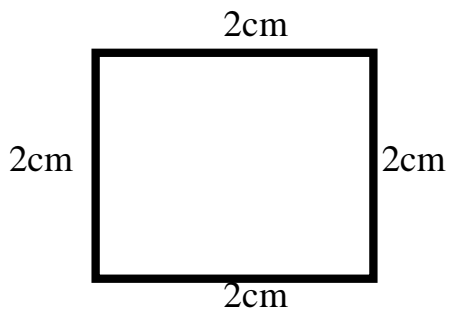
18. 6cm

19. 9cm

20. 5cm

*Find the **perimeter** of the following.*

21.



22.

