

PB PAGEZ EXAMS

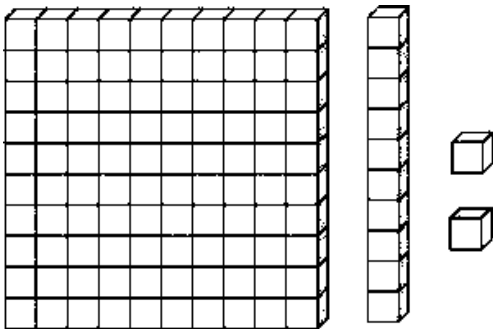
END OF 1ST TERM EXAMINATION

SUBJECT: MATHEMATICS – BASIC FOUR (4)

Name..... Date.....

SECTION: A

- Write 4390 in expanded form.
 - $400 + 300 + 90$
 - $4 + 30 + 9$
 - $4 + 3 + 90$
 - $43 + 90$
- The place value of 5 in 4563 is.....
 - Thousand
 - Tens
 - Hundreds
 - Ones
- The number represented is

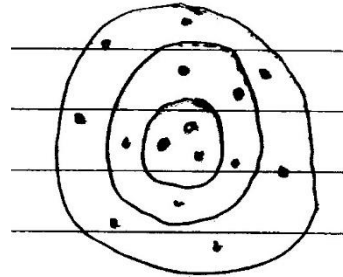


- 1120
 - 1012
 - 11002
 - 1112
- Model GH¢ 30 to pay for a school bag.

-
-
-

-

- The pebbles in the ring represents



- 753
 - 873
 - 743
 - 735
- Seven hundred and sixty seven in written numerals is.....
 - 677
 - 776
 - 7607
 - 767
 - Find the place value of 9 in the number 970.
 - 9000
 - 90
 - 900
 - 9

Compare the numbers by putting in $<$, $>$ or $=$

- 49.....6381
- 9214.....428
- 43.....43
- 34.....4
- The greater number among the following group of numbers 4392, 6385, 6375, 9385 is.....
 - 9385

- b. 6385
- c. 6375
- d. 4392

13. One thousand and forty in numbers is.....

- a. 1004
- b. 1400
- c. 1040
- d. 10040

14. Nine hundred and five in numbers is.....

- a. 9005
- b. 95
- c. 905
- d. 9500

15. The expanded form of the amount GH¢ 3,245 is.....

- a. GH¢ 3 + GH¢ 2 + GH¢ 4 + GH¢ 5
- b. GH¢ 3000 + GH¢ 200 + GH¢ 40 + GH¢ 5
- c. GH¢ 3 + GH¢ 200 + GH¢ 40 + GH¢ 5
- d. GH¢ 3 + GH¢ 2 + GH¢ 45

16. Arrange the following numbers in ascending order 4000, 2000, 5000.

- a. 4000, 2000, 5000
- b. 2000, 4000, 5000
- c. 5000, 4000, 2000
- d. 2000, 5000, 4000

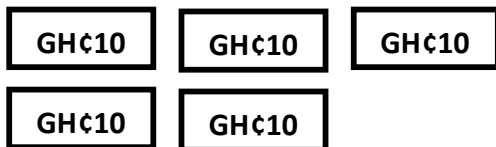
17. What is the total amount of GH¢ 800 + GH¢ 60 + GH¢ 3?

- a. GH¢ 864
- b. GH¢ 8063
- c. GH¢ 1700
- d. GH¢ 890

18. How many rods are there in one flat?

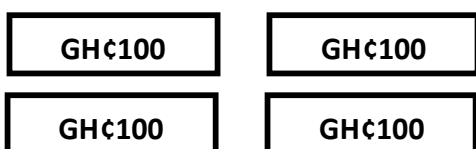
- a. 10
- b. 9
- c. 100
- d. 1000

19. The token currency represents the amount?



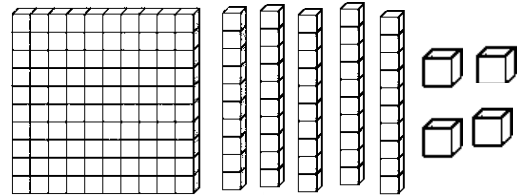
- a. GH¢ 41
- b. GH¢ 40001
- c. GH¢ 401
- d. GH¢ 410

20. The token currency represents the amount.....



- a. GH¢ 301
- b. GH¢ 211
- c. GH¢ 31
- d. GH¢ 211

21. Write the number represented



- a. 1054
- b. 1540
- c. 1540
- d. 1504

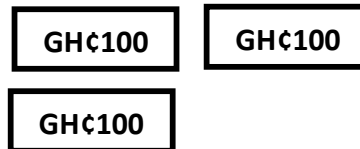
22. If 18 mangoes were shared among three boys, how many will one get?

- a. 5
- b. 6
- c. 7
- d. 8

23. Add $14730 + 2901 = \dots\dots\dots$

- a. 17610
- b. 18301
- c. 17601
- d. 16870

24. What amount is modelled?



- a. GH¢ 21.00
- b. GH¢ 210.00
- c. GH¢ 300.00
- d. GH¢ 201.00

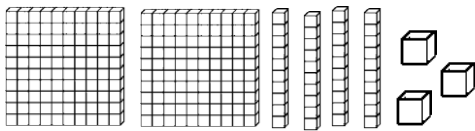
25. The number words for 328 is.....

- a. Thirty and twenty-eight
- b. Three and twenty-eight
- c. Thirty – two and eight
- d. Three hundred and twenty-eight

26. The number words for 5728 is.....

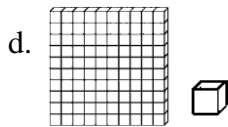
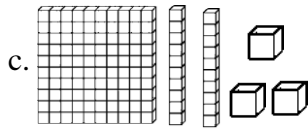
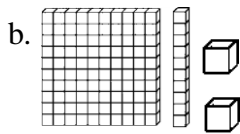
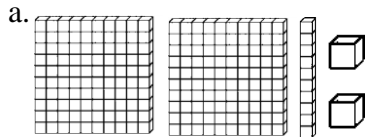
- a. Five, seven, two and eight
- b. Fifty-seven hundred and twenty-eight
- c. Five thousand, seven hundred and twenty-eight
- d. Five hundred and seven thousand and twenty-eight

27. What number is modelled below?

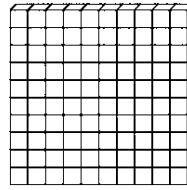


- a. 2440
- b. 2044
- c. 2404
- d. 2044

28. The number 1120 will be modelled as.....

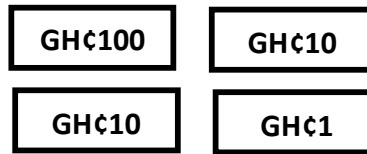


29. The multi-base material represents?



- a. 10
- b. 10,000
- c. 100
- d. 1000

30. What amount is shown?



- a. GH¢ 1111.00
- b. GH¢ 101.00
- c. GH¢ 10021.00
- d. GH¢ 121.00

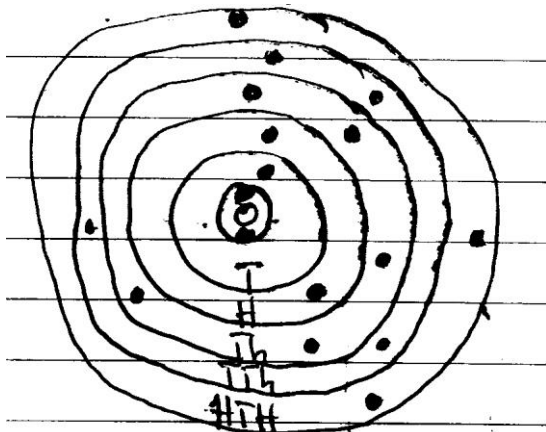
SECTION B:

Answer only **THREE** questions from this section.

1. Using multi-base materials, sketch the following numbers.

- a. 3710
- b. 4560
- c. 8250
- d. 720

2a. Count the pebbles in each ring and represent the number on the place value chat.



b. Show the given numbers on a place value wheel. Use dots to represent pebbles or stones.

i.

HTh	TTh	Th	H	T	O
2	5	1	6	8	2

ii.

Th	H	T	O
3	6	1	5

3. Write the expanded form of the following numbers.

i. 4390 =

ii. 8394 =

iii. 328 =

iv. 4800 =

v. 1720 =

4. Write the numbers for the expanded form

i. $2000 + 900 + 30 = \dots\dots\dots$

ii. $5000 + 700 + 20 + 8 = \dots\dots\dots$

iii. $40000 + 300 + 8 = \dots\dots\dots$

iv. $3000 + 700 + 80 + 1 = \dots\dots\dots$

v. $200 + 1 = \dots\dots\dots$

5. Draw the token currency for the amount.

a. GH¢ 40.00

b. GH¢ 761.00

c. GH¢ 32.00

d. GH¢ 500.00

e. GH¢ 5.00